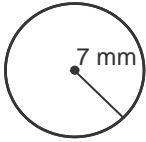
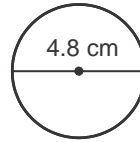


Find the **circumference** and **area** of each circle. Use 3.14 for π .

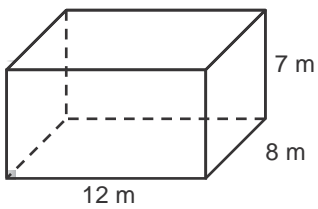
1.



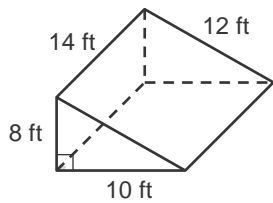
2.



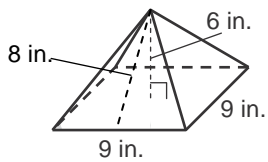
3. Find the **volume** and the **surface area** of the rectangular prism.



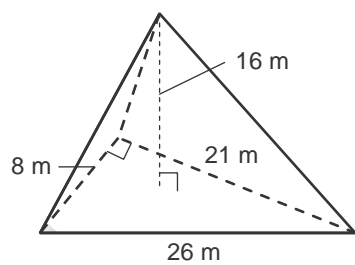
4. Find the **volume** and the **surface area** of the triangular prism.



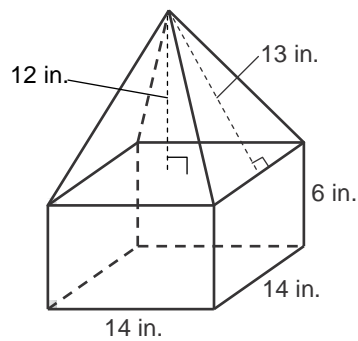
5. Find the **volume** and the **surface area** of the rectangular pyramid.



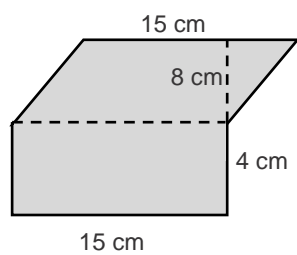
6. Find the **volume** of the following figure.



7. Find the **volume** of the following figure.



8. Find the **area** of the composite figure.



9. Find the **area** of the shaded region.

