










 = 2000 black bears

1. Which state has the fewest black bears?
2. How many black bears does Pennsylvania have?
3. How many more bears are there in Pennsylvania than New York?
4. How many bears are there in Ohio and Michigan together?
5. Which states have an equal number of bears?
6. What is the ratio of the number of bears in New York to Pennsylvania?
7. What is the ratio of the number of bears in Michigan to the total number of bears?

Apple Preference			
Red Delicious	Red Rome	Gala	Fuji
			
			
			
			

 = 15 people

1. What is the total number of people surveyed?
2. How many people preferred Gala apples?
3. What percent of people preferred Gala apples?
4. What percent of people preferred Red Rome apples?
5. What percent preferred Fuji or Gala apples?
6. What was the favorite apples variety?
7. What is the difference in number of people between Red Rome and Gala?
8. What apple is preferred the least?
9. What two apple varieties together would please 50% of the people?
10. What other two apple varieties would please 50% of the people?